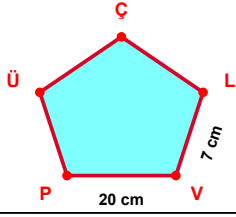
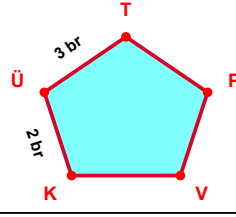


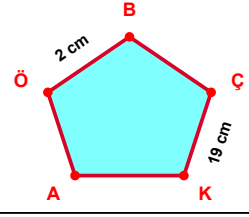
SORU: Aşağıdaki şekillerde verilen, kenar uzunlukları farklarını bulunuz.



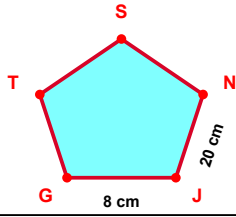
$$|PV| - |VL| = \dots\dots\dots$$



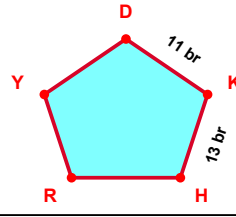
$$|TÜ| - |ÜK| = \dots\dots\dots$$



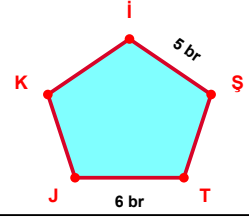
$$|KÇ| - |BÖ| = \dots\dots\dots$$



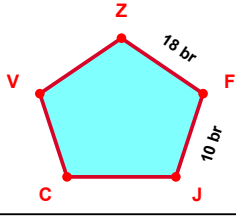
$$|NJ| - |GJ| = \dots\dots\dots$$



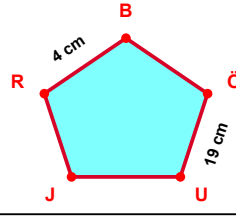
$$|HK| - |KD| = \dots\dots\dots$$



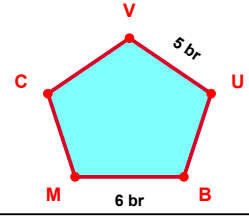
$$|JT| - |Şİ| = \dots\dots\dots$$



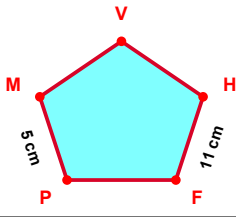
$$|FZ| - |JF| = \dots\dots\dots$$



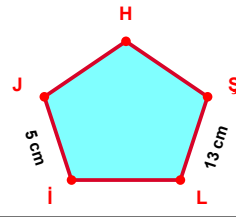
$$|UÖ| - |BR| = \dots\dots\dots$$



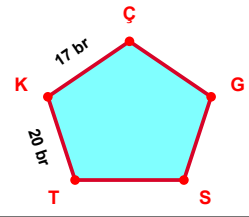
$$|MB| - |UV| = \dots\dots\dots$$



$$|FH| - |MP| = \dots\dots\dots$$

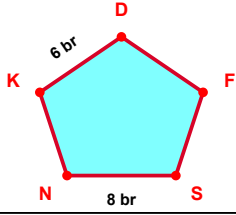


$$|LS| - |Jİ| = \dots\dots\dots$$

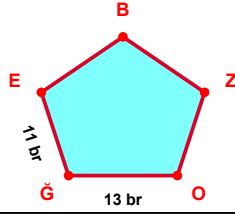


$$|KT| - |ÇK| = \dots\dots\dots$$

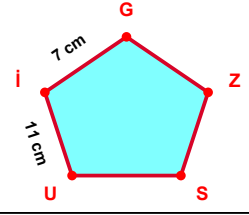
SORU: Aşağıdaki şekillerde verilen, kenar uzunlukları farklarını bulunuz.



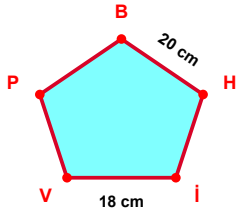
$$|NS| - |DK| = \dots\dots$$



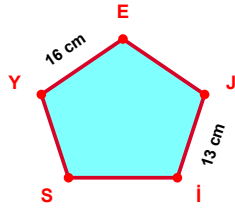
$$|ĞO| - |EĞ| = \dots\dots$$



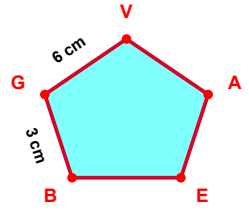
$$|İU| - |Gİ| = \dots\dots$$



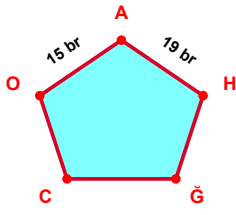
$$|HB| - |Vİ| = \dots\dots$$



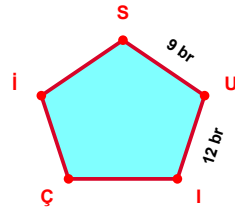
$$|EY| - |İJ| = \dots\dots$$



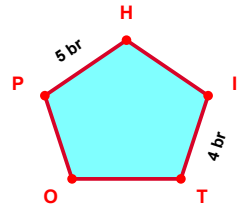
$$|VG| - |GB| = \dots\dots$$



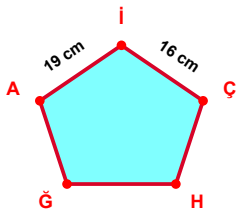
$$|HA| - |AO| = \dots\dots$$



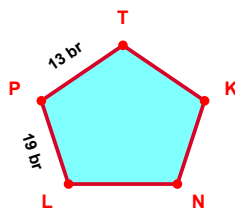
$$|İU| - |İS| = \dots\dots$$



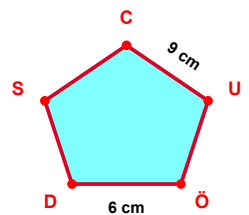
$$|HP| - |İT| = \dots\dots$$



$$|İA| - |İÇ| = \dots\dots$$



$$|PL| - |TP| = \dots\dots$$



$$|UC| - |DÖ| = \dots\dots$$

SÜREÇ ODAKLI DEĞERLENDİRME ÖLÇEĞİ

Doğru Sayısı: / 24

Öğretmen ilgili kutucuğu işaretler.

Geliştirilmeli (0-8)

İyi (9-14)

Çok İyi (15-20)

Mükemmel (21-24)

☐
☐
☐
☐

Hazırlayan:

Bu bölüme sınıfınızın ilgili kazanıma yönelik genel durumuna ilişkin gözlem ve izlenimlerinizi, öğrencilerinizin bu kazanımla ilgili öğrenme eksikliklerini ve bu eksikliklerin giderilmesi amacıyla yaptığınız/yapmayı planladığınız faaliyetleri not edebilirsiniz.

No	Adı - Soyadı	Toplam Puan	Değerlendirme
1			
2			
3			
4			
5			
6			
7			
8			
9			
10			
11			
12			
13			
14			
15			
16			
17			
18			
19			
20			
21			
22			
23			
24			
25			
26			
27			
28			
29			
30			
31			
32			
33			
34			
35			

Hazırlayan: